

Name: _____

Class: 2A1

Date: ____ / ____ / ____

THAI HUNG |



IRIS
SCHOOL

Review for progress test 1 (3)

1 Write **different** numbers in the boxes to complete the **additions**.

$$\square + \square = 15$$

$$\square + \square = 24$$

$$\square + \square = 32$$

$$\square + \square = 15$$

$$\square + \square = 24$$

$$\square + \square = 32$$

$$\square + \square = 15$$

$$\square + \square = 24$$

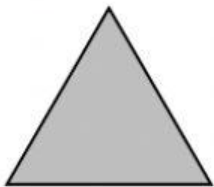
$$\square + \square = 32$$

2 Write these numbers in **order**, from **smallest** to **biggest**.

a) 35, 47, 18

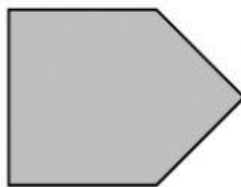
d) 74, 86, 37, 76

3 Write the **number** of **sides** and **right angles** for each shape.




sides

right angles



sides

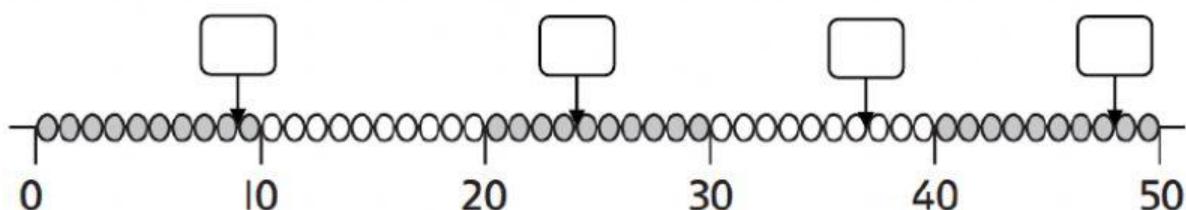
right angles



sides

right angles

4 Put the numbers on the beaded line.




School years: 2022 - 2023

5 **Choose** numbers from the board that are:

a) more than 89

b) less than 28

c) between 34 and 50



5 Children were asked if they like cats and dogs.

	like apples	don't like apples
like bananas	Jack Lucy Mia	Mary
don't like bananas	Kimmy Katy	Brian Cindy

a) How many children **like both apples** and **bananas**?

b) How many children **like bananas** but **don't like apples**?

c) Bob **likes apples** but **doesn't like bananas**.

Write his name in the correct place.

d) Jessica **doesn't like apples** but **likes bananas**.

Write her name in the correct place.

