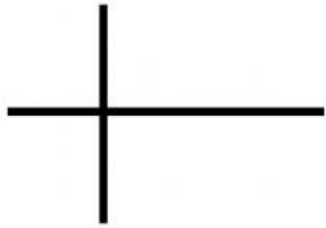


Numbering System

Reinforcement Activities : Part 1

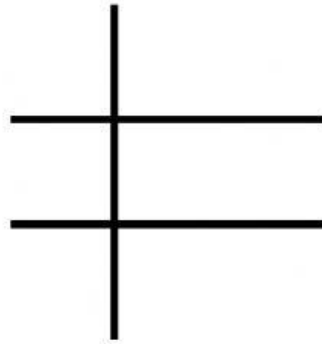
Convert the following decimal values into hexadecimal

i. 5_{10}



Answer: _____

ii. 69_{10}



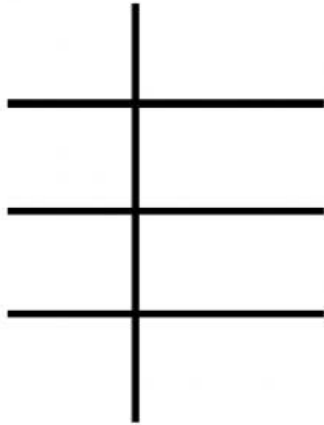
Answer: _____

Numbering System

Reinforcement Activities

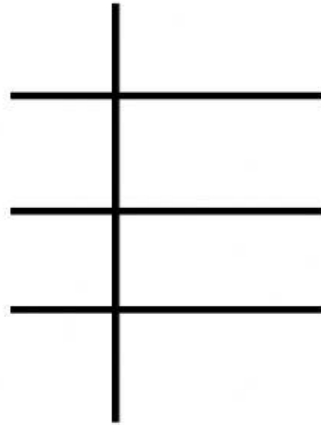
Convert the following decimal values into hexadecimal

iii. 789_{10}



Answer: _____

iv. 1134_{10}



Answer: _____