

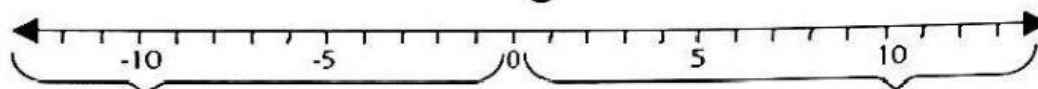
Name/Nombre: \_\_\_\_\_ Date/Fecha: \_\_\_\_\_

ECTG

## Understanding Integers

- \* Integers are numbers that include \_\_\_\_\_, \_\_\_\_\_, and \_\_\_\_\_ numbers (see the number line below).
- \* On a number line, \_\_\_\_\_ numbers are represented on the left of "0", which values are \_\_\_\_\_ "0"
- \* \_\_\_\_\_ numbers on the right of "0", which values are \_\_\_\_\_ "0"

### Integers



**Negative integers** are the opposite of positive integers.

Zero is neither positive nor negative. The opposite of 0 is 0.

**Positive integers** are also called counting numbers.

- \* Integer word clues

Negative integers	Positive integers

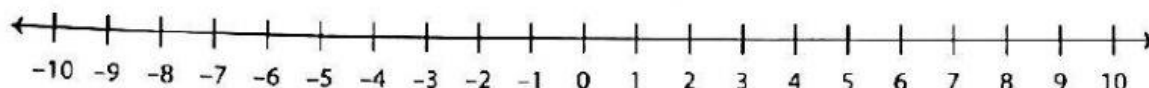
Name/Nombre: \_\_\_\_\_ Date/Fecha: \_\_\_\_\_

FCTG

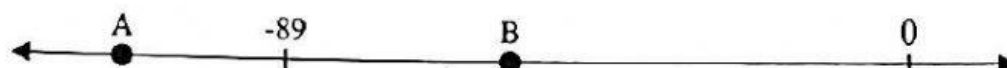
## DO NOW!

1. Mark the integer on the number line.

- a) -2    b) 7    c) -5    d) 1



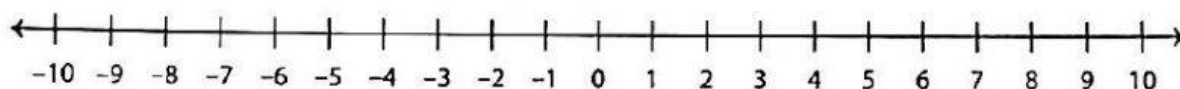
2. Which letter best shows -112?



3. Which letter best shows -43?



4. Answer the questions using the number line below.



(1) 2 units to the left of 3 is \_\_\_\_\_. (2) 6 units to the right of -1 is \_\_\_\_\_.

(3) 3 units to the right of 7 is \_\_\_\_\_. (4) 8 units to the left of 5 is \_\_\_\_\_.

5. Representations using integers.

Situation	Integer	Situation	Integer
the loss of 5 yards	-5	A gain of 45 yards	
19 degrees below zero	-19	12 degrees above zero	
A profit of 400 dollars	400	A loss of 29 dollars	
A debt of 250 dollars	-250	a surplus of 25 computers	
100 feet below sea level	-100	4,000 feet above sea level	
a decrease of 18 degrees		An increase of 10 degrees	
An increase of 20 students		A decrease of 34 students	
A gain of 56 yards		A loss of 11 yards	
8 strokes under par		3 strokes over par	
32 degrees above zero		25 degrees below zero	
A profit of \$10		A debt of \$300	

Name/Nombre: \_\_\_\_\_ Date/Fecha: \_\_\_\_\_