













KENDRIYA VIDYALAYA, YPR, BENGALURU-12











Name

Class & Sec

Write the capacity of each individual container.

1)	 = 	 = _____ mL
2)	 = 	 = _____ mL
3)	 = 	 = _____ L
4)	 = 	 = _____ mL

Liquid measurements

 60ml	+	 120ml	=	_____ ml
 500ml	+	 500ml	=	_____ litres
 30ml	+	 20ml	=	_____ ml
 100ml	+	 370ml	=	_____ ml
 600ml	+	 220ml	=	_____ ml


Choose the Correct options of the four options given below and put ✓ on answer.

1. A spoon of Cough Syrup is measured in _____

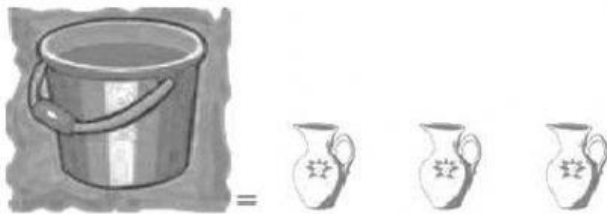
- a) Meter b) Milliliter c) Litre d) Millimeter

2 .A can of Oil is measured in _____

- a) Meter b) Milliliter c) Litre d) Millimeter

If each Jug  can hold 2 litres if 1 Bucket = 4 jugs

Then what is the capacity of Bucket in litres ?



5. Daily a person uses a drinking water near about


- a) 8 spoons b) 08 buckets c) 8 Cups d) 08 Glasses

6. Mahi had 1 lit of water she drunk 250 ml of water her brother drank 150 ml of water how much water is left in her bottle.

- a) 500ml b) 1000 ml c) 600 ml d) 700 ml

7. The tap is leaking 10 bottles of water of each 1 liter in a day how much water will be wasted in a day.

- a) 700 Bottles b) 50 Bottles c) 70 Bottles d) 60 bottles

8. If 2  Jug can hold 10 litres of water then 5 jugs can hold ____ ?

- a) 26 litres b) 24 litres c) 20 litres d) 25 litres

9. To fill 1 litre bottle Reena needs to pour 200 ml bottle _____ times?

- a) 7 b) 10 c) 5 d) 08

10. 1 Injection gives 5 ml of medicine how much a medicine a doctor will inject for 5 days?

- a) 15ml b) 55 ml c) 25 ml d) 35 ml