
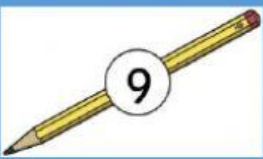






PHIẾU BÀI TẬP TOÁN TIẾNG ANH – SỐ 2




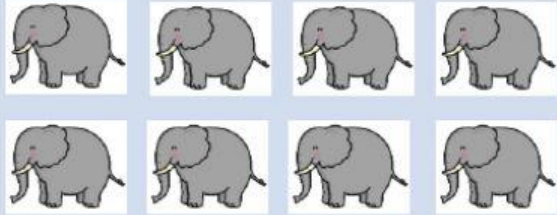
1. Click the correct answer.

- a. 5 is 15. A. more than B. less than
- b. 17 is 11. A. more than B. less than
- c. 10 cats are 20 cats. A. fewer than B. more than
- d. 16 stars are 9 stars. A. fewer than B. more than

2. Fill in the blank with MORE or FEWER.

a.		is		than	
b.		is		than	
c.		is		than	

3. Count the items in each group. Click MORE or FEWER.

a.			
	<input type="text"/> ostriches		<input type="text"/> giraffes
	There are		ostriches than giraffes.
b.			
	<input type="text"/> lions		<input type="text"/> elephants.
	There are		lions than elephants.

4. In the boxes, write 1 less and 1 more than the number shown on each sweet.

one less →  ← one more

