

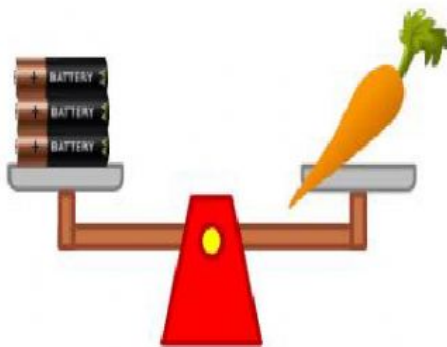


Codeyoung

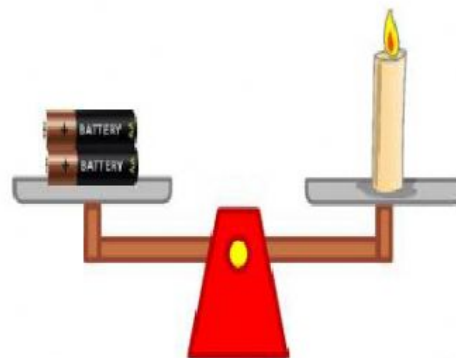
Measure weights and perform operations on weight

HW_ Weight Measurement

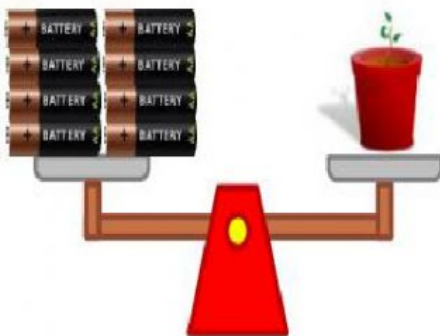
3



The weight of the carrot in
batteries is **3 Batteries**



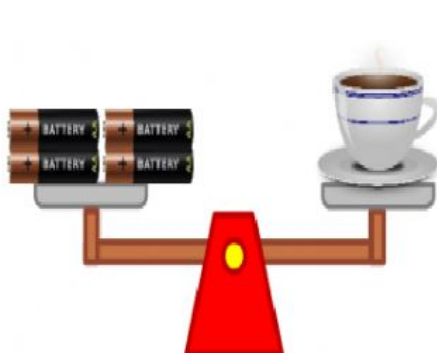
The weight of the candle in
batteries is ____.



The weight of the plant in
batteries is ____.



The weight of the croissant
in batteries is ____.



The weight of the coffee in batteries is _____.



The weight of the coffee in cupcakes is _____.

Which object is the heaviest?

Which one is heavier: cupcake or croissant?


We measure lighter objects (like pencils) in ounces and heavier objects (like a printer) in pounds.

Match the proper unit of measurement with the objects by drawing lines from the object to the unit.

A tennis ball



A dog



An apple



A man



OUNCES

POUNDS

A toy car



A spoon



A full box



A desk

