

Class-V, Mathematics
Can You See the Patterns?
Worksheet-2

(10)

1. What is the growth interval for the following sequences?(4x1=4)

(a) 2, 4, 6, 8, 10, 12, 14, 16, 18, 20

These numbers grow by

(b) 45, 40, 35, 30, 25, 20, 15, 10, 5

These numbers reduce by

(c) 5, 10, 15, 20, 25, 30, 35, 40, 45

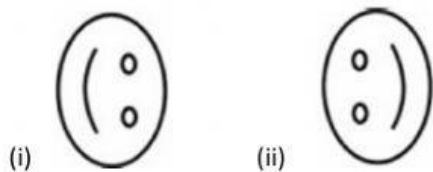
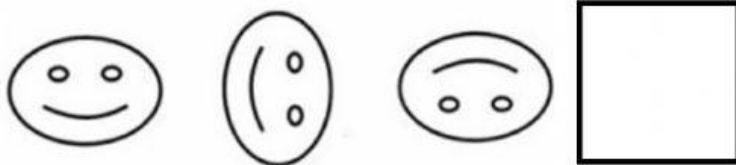
These numbers grow by

(d) 27, 24, 21, 18, 15, 12, 9, 6, 3

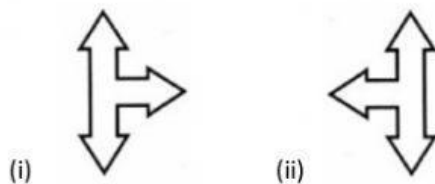
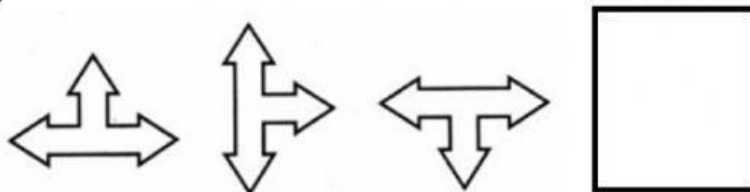
These numbers reduce by

2. Complete the following pattern by dragging the answer to the box:(6x1=6)

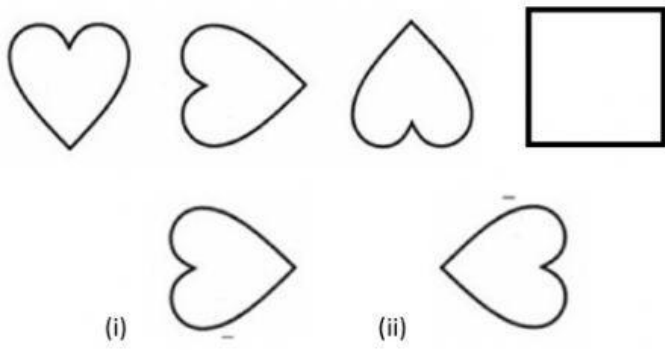
a)



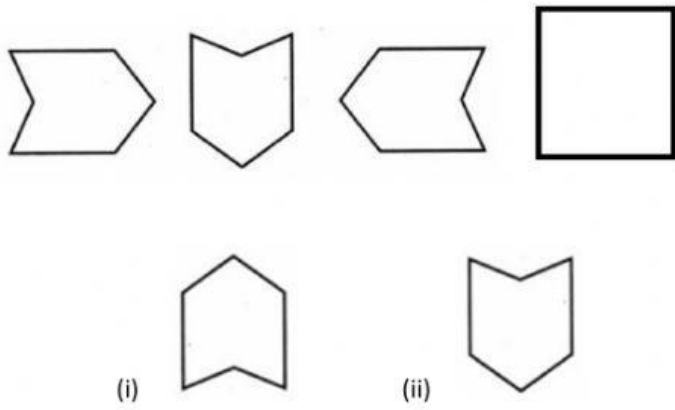
b)



c)



d)



e)

