

1. Diagram 1 shows part of the human digestive system.

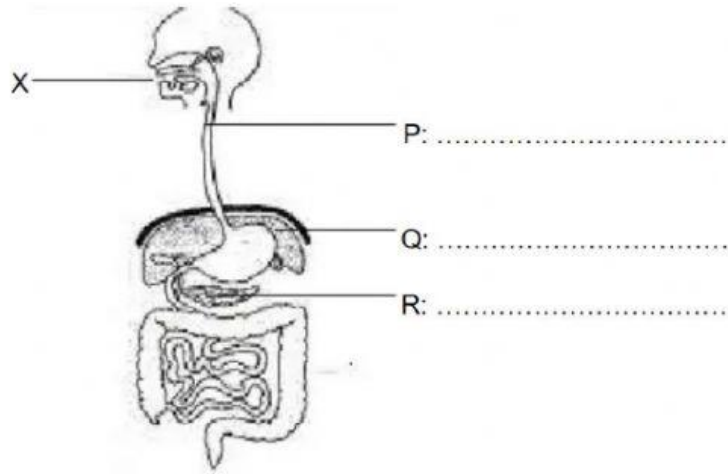


Diagram 1

(a) Label structures P, Q and R using the following words.

Pancreas	Liver	Oesophagus
----------	-------	------------

[3 marks]

(b) (i) Name the enzyme that is found in X.

.....  
[1 mark]

(ii) State the function of the enzyme in b(i).

.....  
[1 mark]

(c) State the function of R.

.....  
[1 mark]

(d) Name the process by which food is moved along P.

.....  
[1 mark]

2. Diagram 2 shows some parts of the digestive system.

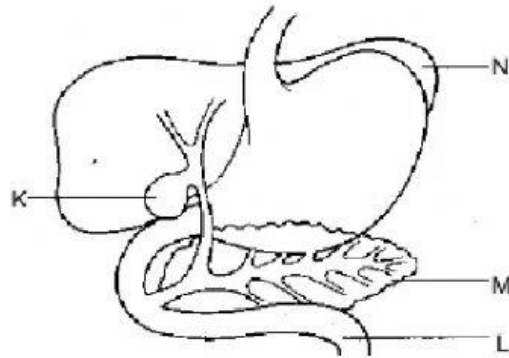


Diagram 2

(a) Name the following parts:

K : .....

L : .....

M : .....

N : .....

[4 marks]

(b) What is stored in the part labelled K? Where is it produced?

.....

[2 marks]

(c) Digestion of food ends in part L. State the end products of digestion for:

(i) carbohydrates : .....

(ii) protein : .....

(iii) fats : .....

[3 marks]

# The Digestive System Worksheet 1

Label the diagram of the digestive system. Use the word bank to help.

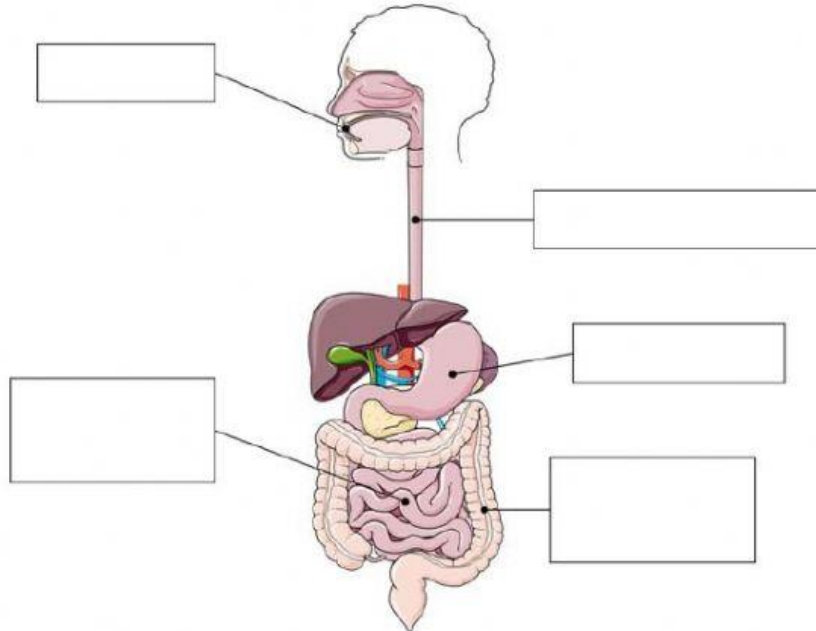
large intestine

mouth

stomach

oesophagus

small intestine



Copyright 2020 Online Teaching Resources Ltd

