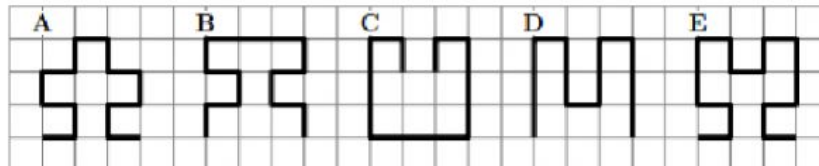



Helena has written down the word KANGAROO twice. How many times did she write the letter A?

- (A) 1                      (B) 2                      (C) 3                      (D) 4                      (E) 6

Which of the following lines is the longest?



- (A) A                      (B) B                      (C) C                      (D) D                      (E) E



How many animals are in the picture?


- (A) 3                      (B) 4                      (C) 5                      (D) 6                      (E) 7

Which piece fits in the empty place?



- (A) (B) (C) (D) (E)

How many legs do they have altogether?



- (A) 5      (B) 10      (C) 12      (D) 14      (E) 20

Luke repeats the same four stickers on a strip.



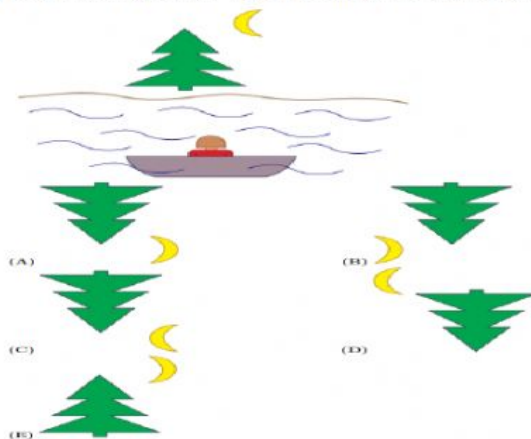
Which is the tenth sticker put by Luke?

- (A)      (B)      (C)      (D)      (E)

On Friday Dan starts to paint the word BANANA. Each day he paints one letter. On what day will he paint the last letter?

- (A) Monday      (B) Tuesday      (C) Wednesday      (D) Thursday      (E) Friday

Katja is in a boat on a lake. Which of the pictures does she see in the lake?



Eve brings 12 candies, Alice 9 candies and Irene doesn't bring any candy. They put all the candies together on a table and divide them equally among themselves. How many candies does each of the girls get?

- (A) 3                      (B) 7                      (C) 8                      (D) 9                      (E) 12

Tim is looking at seven silk paintings on a wall. At the left he sees the dragon and on the right the butterfly.



Which animal is on the left of the tiger and the lion, and on the right of the apricot?



Winnie the Pooh bought 4 apple pies and Eeyore bought 6 cheese cakes. They paid the same and together they paid 24 euros. How many euros does 1 cheese cake cost?

- (A) 2                      (B) 4                      (C) 6                      (D) 10                      (E) 12

Grandmother made 11 cookies. She decorated 5 cookies with raisins and then 7 cookies with nuts. At least how many cookies were decorated with both raisins and nuts?

- (A) 1                      (B) 2                      (C) 5                      (D) 7                      (E) 12