

































Determine which letter best represents each fraction.

- 1) Which choice best represents  $\frac{2}{3}$ ?  
 A.  B.  C.  D. 
- 2) Which choice best represents  $\frac{2}{4}$ ?  
 A.  B.  C.  D. 
- 3) Which choice best represents  $\frac{3}{6}$ ?  
 A.  B.  C.  D. 
- 4) Which choice best represents  $\frac{6}{8}$ ?  
 A.  B.  C.  D. 
- 5) Which choice best represents  $\frac{1}{3}$ ?  
 A.  B.  C.  D. 
- 6) Which choice best represents  $\frac{3}{4}$ ?  
 A.  B.  C.  D. 
- 7) Which choice best represents  $\frac{2}{6}$ ?  
 A.  B.  C.  D. 
- 8) Which choice best represents  $\frac{2}{8}$ ?  
 A.  B.  C.  D. 

## Answers

1. \_\_\_\_\_
2. \_\_\_\_\_
3. \_\_\_\_\_
4. \_\_\_\_\_
5. \_\_\_\_\_
6. \_\_\_\_\_
7. \_\_\_\_\_
8. \_\_\_\_\_

Solve each problem.

1) Which letter best shows -27?



2) Which letter best shows -16?



3) Which letter best shows -18?



4) Which letter best shows -15?



5) Which letter best shows -91?



6) Which letter best shows -75?



7) Which letter best shows -81?



8) Which letter best shows -10?



## Answers

1. \_\_\_\_\_

2. \_\_\_\_\_

3. \_\_\_\_\_

4. \_\_\_\_\_

5. \_\_\_\_\_

6. \_\_\_\_\_

7. \_\_\_\_\_

8. \_\_\_\_\_