












Concept_HW_KinderGarden_Word Problem:
Addition up to 20

Count and add the numbers

		WORKING OUT
1)	<p>On Monday, I see 13 .</p> <p>On Tuesday, I see 7 .</p> <p>How many  in total? _____</p>	
2)	<p>A shop sells 10 .</p> <p>The next day it sells 4 .</p> <p>How many  were sold? _____</p>	
3)	<p>There are 6  in a garden.</p> <p>8 more  come along.</p> <p>How many  are there now? _____</p>	