


Treble Clef Worksheet


Write the name of each note on the line beneath the staff


Copyright © 2013 EarTrainingandImprov.com. All rights reserved. For home and private teacher use only.
May not be sold, reproduced or transmitted in any form without the expressed written permission of the publisher.


Bass Clef Worksheet

Write the name of each note on the line beneath the staff





























Copyright © 2013 EarTrainingandImprov.com. All rights reserved. For home and private teacher use only.
May not be sold, reproduced or transmitted in any form without the expressed written permission of the publisher.





















Music Math - Level 1

(Add the beats)

Notes

1.  +  = _____
2.  +  = _____
3.  +  = _____
4.  +  = _____
5.  +  = _____
6.  +  = _____
7.  +  = _____
8.  +  = _____
9.  +  = _____
10.  +  = _____

Rests

11.  +  = _____
12.  +  = _____
13.  +  = _____
14.  +  = _____
15.  +  = _____
16.  +  = _____
17.  +  = _____
18.  +  = _____
19.  +  = _____
20.  +  = _____

Music Math - Level 2

(Add the beats)

$$\text{♩.} = \text{♩} + \left(\frac{1}{2}\text{♩}\right)$$

$$\text{♩.} = \text{♩} + \left(\frac{1}{2}\text{♩}\right)$$

Notes

1. $\text{♩.} + \text{♩} = \underline{\hspace{2cm}}$
2. $\text{♩} + \text{♩.} = \underline{\hspace{2cm}}$
3. $\text{♩} + \text{♩.} = \underline{\hspace{2cm}}$
4. $\text{♩.} + \text{♩} = \underline{\hspace{2cm}}$
5. $\text{♩.} + \text{♩} = \underline{\hspace{2cm}}$
6. $\text{♩} + \text{♩} = \underline{\hspace{2cm}}$
7. $\text{♩} + \text{♩.} = \underline{\hspace{2cm}}$
8. $\text{♩.} + \text{♩.} = \underline{\hspace{2cm}}$
9. $\text{♩.} + \text{♩.} = \underline{\hspace{2cm}}$
10. $\text{♩} + \text{♩} = \underline{\hspace{2cm}}$

Rests

11. $\text{♩} + \text{♩} = \underline{\hspace{2cm}}$
12. $\text{♩.} + \text{♩} = \underline{\hspace{2cm}}$
13. $\text{♩} + \text{♩.} = \underline{\hspace{2cm}}$
14. $\text{♩} + \text{♩} = \underline{\hspace{2cm}}$
15. $\text{♩.} + \text{♩} = \underline{\hspace{2cm}}$
16. $\text{♩} + \text{♩} = \underline{\hspace{2cm}}$
17. $\text{♩} + \text{♩.} = \underline{\hspace{2cm}}$
18. $\text{♩} + \text{♩} = \underline{\hspace{2cm}}$
19. $\text{♩.} + \text{♩.} = \underline{\hspace{2cm}}$
20. $\text{♩} + \text{♩} = \underline{\hspace{2cm}}$