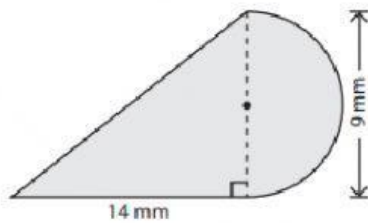


Concept HW_Grade-7_Perimeter and Area

Area and Perimeter of Composite Shapes

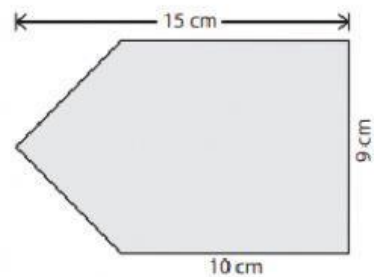
Find the area of the shaded region in each figure. Round your answer to two decimal places. (use $\pi = 3.14$)

1)



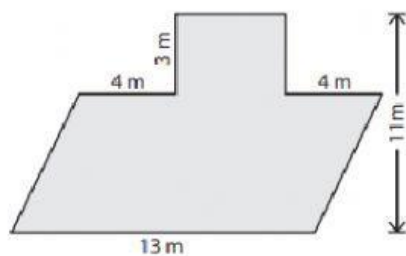
Area = _____

2)



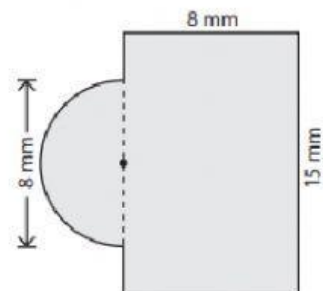
Area = _____

3)



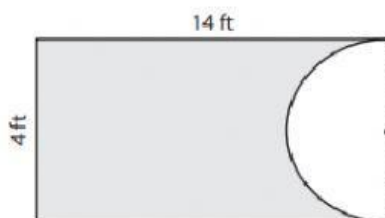
Area = _____

4)



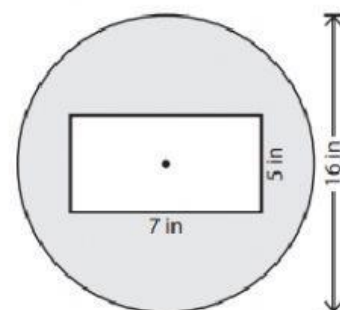
Area = _____

5)



Area = _____

6)



Area = _____