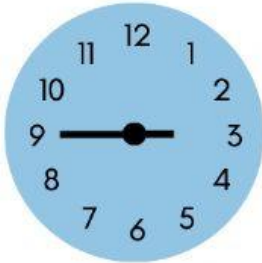



# L'heure


Sélectionne la bonne réponse afin d'indiquer l'heure exacte à coté de chaque horloge.



IL EST....



IL EST....




IL EST....



IL EST....




IL EST....



IL EST....



IL EST....



IL EST....

3H45

4H15

3H05

2H25

5H00

5H35

5H30

4H05