

Name: \_\_\_\_\_ Date: \_\_\_\_\_

**Mathematics**  
**Perimeter Worksheet**

1. Find the perimeter of each rectangle.

a) Length = 1000 mm  
Width = 750 mm

b) Length = 16.2 m  
Width = 6.3 m

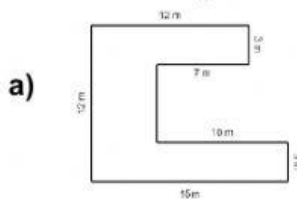
c) Length = 85.4m  
Width = 42.7 m

Perimeter = \_\_\_\_\_ mm

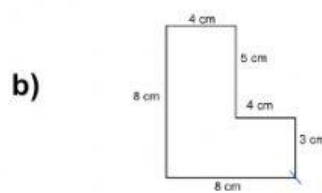
Perimeter = \_\_\_\_\_ m

Perimeter = \_\_\_\_\_ m

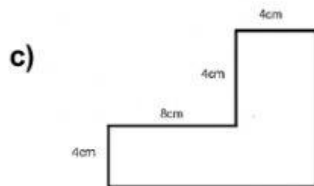
2. Calculate the perimeter of the shapes below.



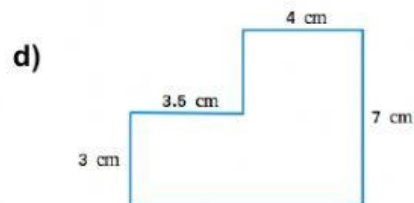
Perimeter = \_\_\_\_\_ m



Perimeter = \_\_\_\_\_ cm



Perimeter = \_\_\_\_\_ cm



Perimeter = \_\_\_\_\_ cm

3. Read the word problem. Estimate to find which answer makes sense.

**A rectangle is 47m long and 24 m wide. What is the perimeter?**

about 70 m

about 140 m

less than 100 m

**The perimeter of a square is 144 cm. What is the length of each side?**

about 12 cm

about 35 cm

more than 40 cm

Created by: Ms. Antonia Bain