



NOM:

DATA:

FRACCIONS

Clica dins de la fracció correcta



$\frac{1}{2}$

$\frac{1}{4}$

$\frac{2}{3}$

$\frac{3}{4}$



$\frac{1}{2}$

$\frac{1}{4}$

$\frac{2}{3}$

$\frac{3}{4}$



$\frac{1}{2}$

$\frac{1}{4}$

$\frac{2}{3}$

$\frac{3}{4}$



$\frac{1}{2}$

$\frac{1}{4}$

$\frac{1}{3}$

$\frac{2}{3}$



$\frac{1}{2}$

$\frac{1}{4}$

$\frac{1}{3}$

$\frac{2}{3}$




$\frac{1}{6}$

$\frac{1}{5}$

$\frac{3}{5}$

$\frac{2}{3}$



$\frac{1}{2}$

$\frac{1}{6}$

$\frac{4}{6}$

$\frac{1}{3}$



NOM:

DATA:

FRACCIONS

Clica dins de la fracció correcta

1.



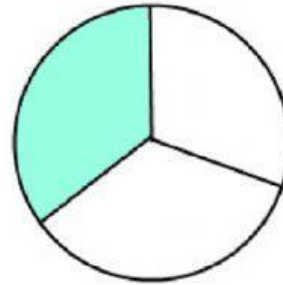
$\frac{1}{2}$

$\frac{3}{2}$

$\frac{2}{3}$

$\frac{1}{3}$

2.



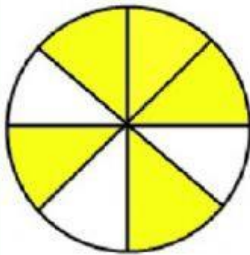
$\frac{1}{3}$

$\frac{3}{4}$

$\frac{1}{2}$

$\frac{2}{3}$

3.



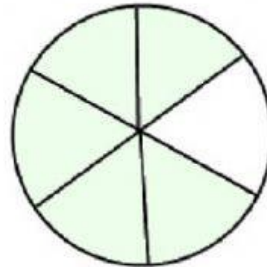
$\frac{3}{8}$

$\frac{5}{8}$

$\frac{3}{4}$

$\frac{2}{7}$

4.



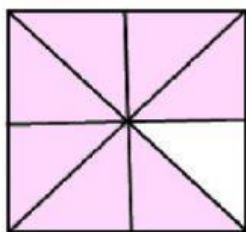
$\frac{6}{5}$

$\frac{3}{6}$

$\frac{2}{5}$

$\frac{5}{6}$

5.



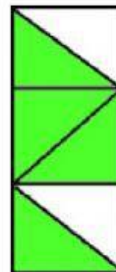
$\frac{3}{8}$

$\frac{6}{8}$

$\frac{7}{8}$

$\frac{8}{7}$

6.



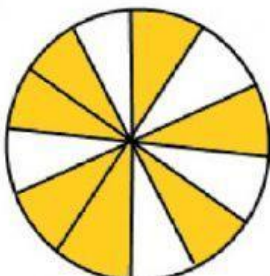
$\frac{4}{6}$

$\frac{5}{6}$

$\frac{6}{5}$

$\frac{2}{6}$

7.




$\frac{11}{12}$

$\frac{7}{12}$

$\frac{7}{11}$

$\frac{8}{12}$

8.



$\frac{5}{9}$

$\frac{7}{9}$

$\frac{6}{9}$

$\frac{9}{9}$

