

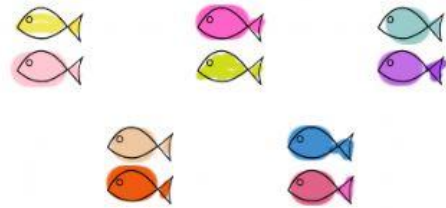
Multiplication groups

Look at the pictures and fill in the blanks




groups of

$$\square \times \square = \square$$




groups of

$$\square \times \square = \square$$



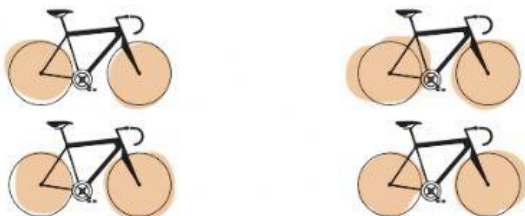
groups of

$$\square \times \square = \square$$




groups of

$$\square \times \square = \square$$



groups of

$$\square \times \square = \square$$



groups of

$$\square \times \square = \square$$