


Name: _____

Count the squares and find the perimeter of each shape.

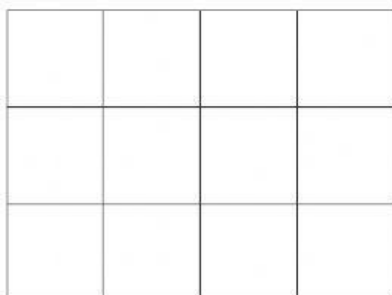
Remember: Perimeter is the distance around a shape.



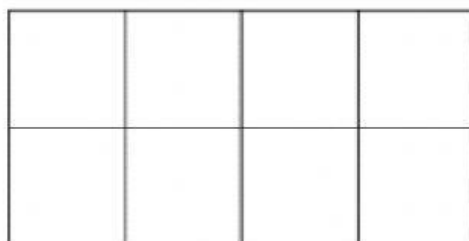
Perimeter _____ cm



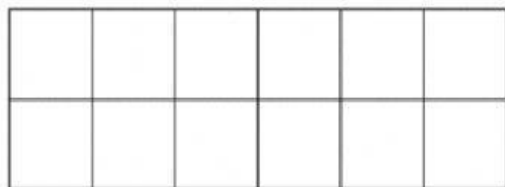
perimeter = _____ cm



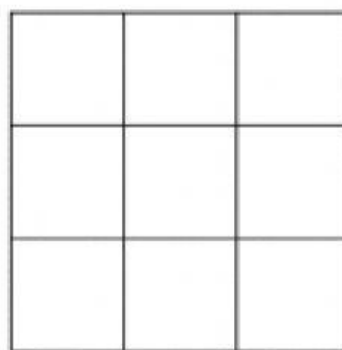
Perimeter = _____ cm



Perimeter = _____ cm



Perimeter = _____ cm



Perimeter = _____ cm