

Angles & Shapes

Grade 5 Math

I. Choose the correct answer:

1. Rectangle has _____ sides.

(a) 3 (b) 4 (c) 6

2. The angle is measured using a _____

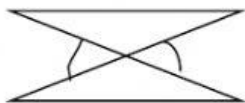
(a) degree (b) celsius (c) metres

3. How many angles are there in this shape?



(a) 4 (b) 5 (c) 6

4.



The angle marked in this figure is _____

(a) The Right angle (b) more than a right angle (c) less than a right angle

5. How many angles are there in letter "M"

(a) 3 (b) 2 (c) 6


II. Fill in the blanks:


1. 105° is a _____ than a right angle.

2. A right angle measure _____ degrees.

3. The common end point where two rays meet is called an _____.

III. Match the following:

1.  - right angle

2.  - angle less than a right angle

3. 90° - angle more than a right angle

