

SCHOLASTIC ACADEMY

WEEKLY TEST

FRIDAY 11TH JUNE, 2021

Mathematics

Marks: _____

Out of: 20

Grade: _____

A. Put the objects in order from GREATEST to LEAST capacity.



--	--	--	--

/2

B. Put the objects in order from LEAST to GREATEST capacity.



--	--	--	--

/2

C. Solve the following sum.

It takes 3 cups



to fill 1 bowl.



bowl

The capacity of the jug is 4 times the bowl.







How many cups will it take to fill the jug?



_____ cups

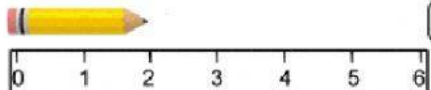



/2

D. Choose the best unit of measurement for the following.

<p>Distance travelled by a plane</p> 	<p>Length of a pair of scissors</p> 	<p>Width of a shirt</p> 
km m cm	km m cm	km m cm
<p>Height of a tree</p> 	<p>Distance driven from Toco to Arima</p> 	<p>Height of a house</p> 
km m cm	km m cm	km m cm

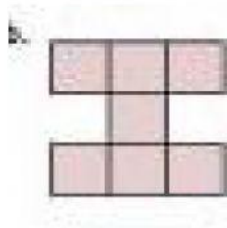
/6

E. Measure the length of each pencil below.


	_____ cm
	_____ cm
	_____ cm
	_____ cm

/6

F. Find the area of the following shapes.



_____ square units



_____ square units

/2