



# Two Dimensional Shapes


Instruction : Answer the questions below

1. Is this shape an open or a close shape?



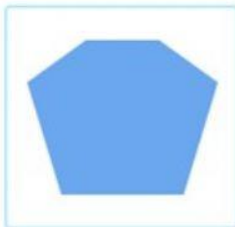


open close



2. Which shape has 3 equal sides?



3. Which shape has 6 equal sides?



4. Which shape has more corners?



5. Is this shape an open or a close shape?



open close