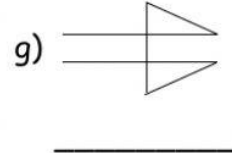
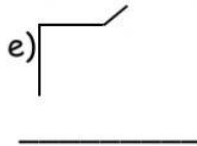
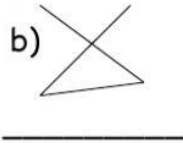
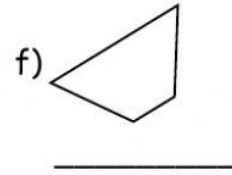
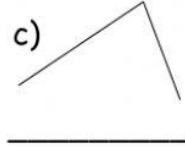
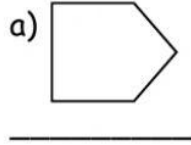
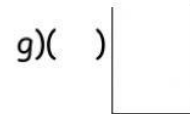
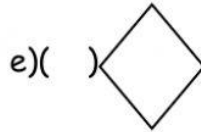
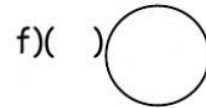
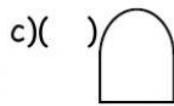
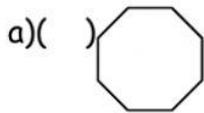


1. Classifique as linhas poligonais em abertas ou fechadas, simples ou não simples.



2. Algumas figuras geométricas abaixo representam polígonos e outras não. Marque as que representam polígonos.



3. Explique por que as figuras que não foram marcadas não são polígonos.

4. As bandeiras abaixo são formadas por várias figuras geométricas. Quais destas bandeiras apresentam apenas figuras que são polígonos?



Resp. _____

Qualquer dúvida é só perguntar.

