

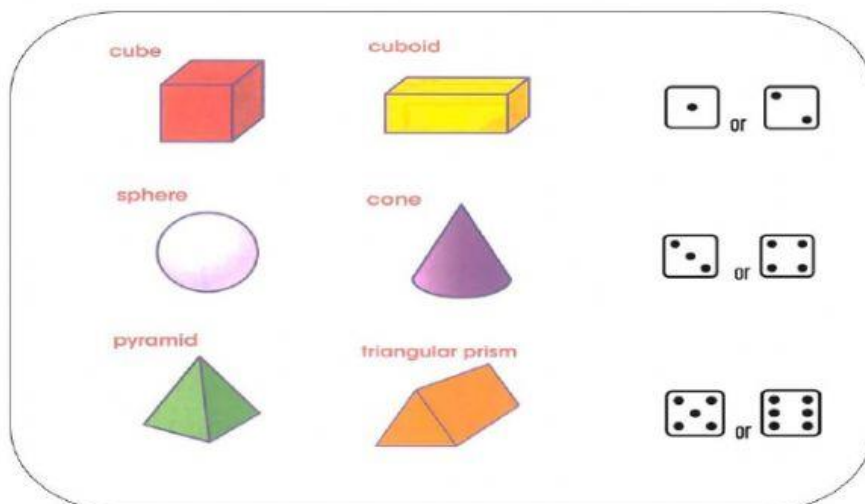
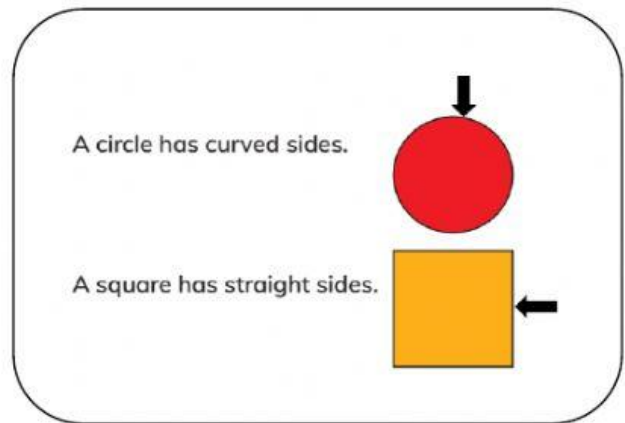
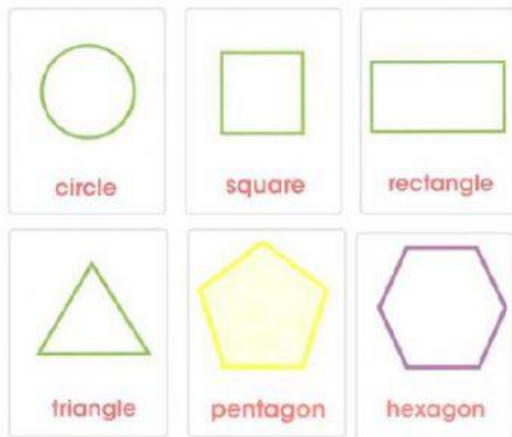


**Cambridge Primary Programme**

Name: \_\_\_\_\_




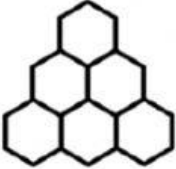





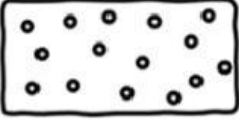


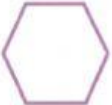







Date: \_\_\_\_\_

Class: \_\_\_\_\_





1. Tick the shapes that match their names.

| Name   | Shapes  |  |   |
|--|---|--|---|
| 1. <br>rectangle  | <br><input type="checkbox"/>   | <br><input type="checkbox"/>   | <br><input type="checkbox"/>   |
| 2. <br>triangle   | <br><input type="checkbox"/>   | <br><input type="checkbox"/>   | <br><input type="checkbox"/>   |
| 3. <br>square   | <br><input type="checkbox"/> | <br><input type="checkbox"/> | <br><input type="checkbox"/> |
| 4. <br>hexagon  | <br><input type="checkbox"/> | <br><input type="checkbox"/> | <br><input type="checkbox"/> |
| 5. <br>pentagon | <br><input type="checkbox"/> | <br><input type="checkbox"/> | <br><input type="checkbox"/> |

2. Draw lines to match the shape names and shapes.

a

cone

b

cube

c

pyramid

d

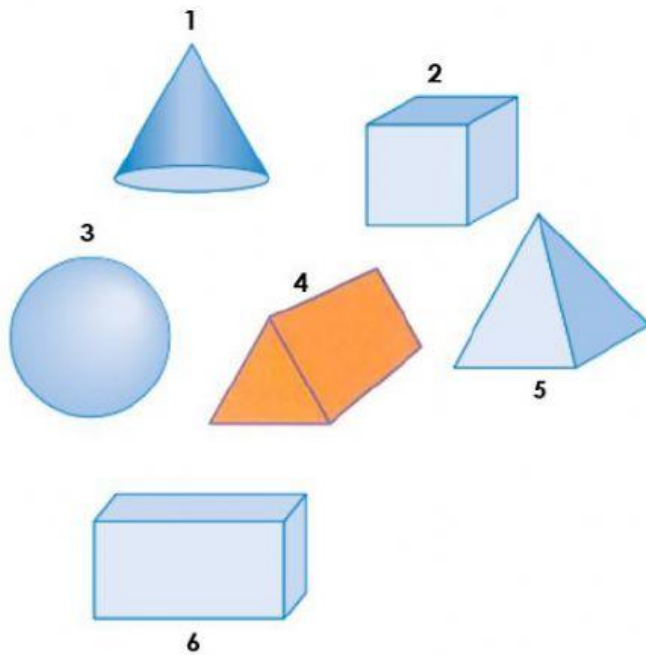
triangular prism

e

cuboid

f

sphere



3. Count and write.



How many triangles?




How many squares?




How many rectangles?




How many circles?




How many pentagons?

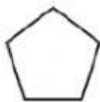



How many hexagons?


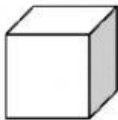


4. Choose the object that matches the first shape.

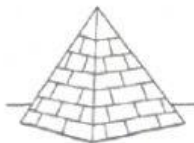
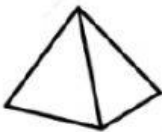
1.



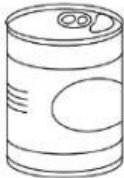
2.



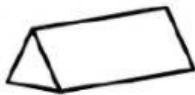
3.






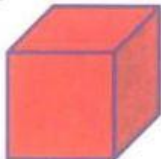




4.



5.



5. What 3D shapes can you make by putting these 2D shapes together? Look and match.

|   |            |   |
|---|------------|---|
| <p><b>a</b></p>    | <p>—</p>   | <br>cuboid           |
| <p><b>b</b></p>    | <p>• •</p> | <br>cube             |
| <p><b>c</b></p>    | <p>• •</p> | <br>triangular prism |
| <p><b>d</b></p>  | <p>• •</p> | <br>pyramid        |

