



**GREENFIELD  
SCHOOL**

Cambridge Assessment  
International Education  
Cambridge International School

Happy School : an education from the heart within

**Cambridge Primary Programme**

## CAMBRIDGE PRIMARY MATHEMATICS 1

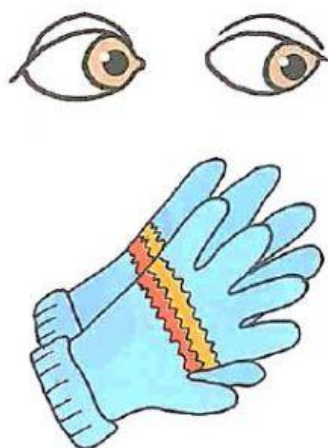
### REVISION 6

Name: \_\_\_\_\_

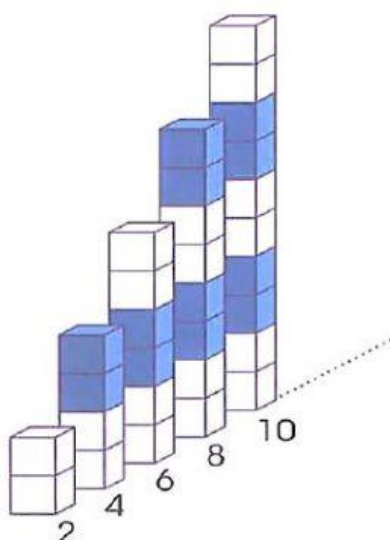
Date: \_\_\_\_\_ Class: \_\_\_\_\_



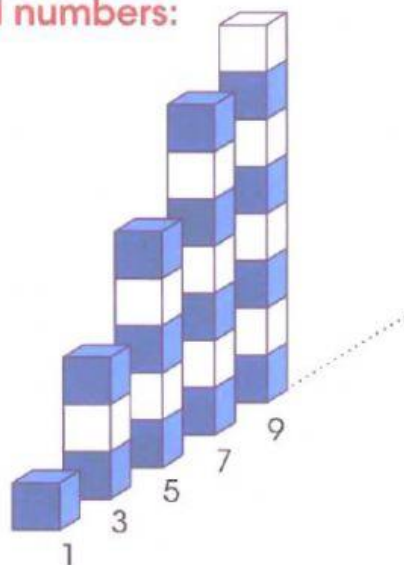
pair:



even numbers:





odd numbers:






1. Find a pair in each line.



B

B

D




2. Choose even or odd for each number.

7	Even Odd	1	Even Odd
2	Even Odd	4	Even Odd
8	Even Odd	5	Even Odd


3. Choose the correct number.

45	12	20
----	----	----



Even numbers

55	87	34
----	----	----



Odd numbers

4. Write the numbers of items and choose odd or even.




# What's for Dinner?

	7	<input checked="" type="radio"/> odd <input type="radio"/> even
		<input type="radio"/> odd <input type="radio"/> even
		<input type="radio"/> odd <input type="radio"/> even
		<input type="radio"/> odd <input type="radio"/> even
		<input type="radio"/> odd <input type="radio"/> even
		<input type="radio"/> odd <input type="radio"/> even
		<input type="radio"/> odd <input type="radio"/> even
		<input type="radio"/> odd <input type="radio"/> even
		<input type="radio"/> odd <input type="radio"/> even
		<input type="radio"/> odd <input type="radio"/> even

5.

(a) Look at the gloves.

	<p>How many gloves?</p> <input data-bbox="933 450 1010 526" type="text"/>
	<p>Is that an odd or even number?</p> <p>odd / even</p>

(b) Look at the socks

	<p>How many socks?</p> <input data-bbox="933 1211 1010 1288" type="text"/>
	<p>Is that an odd or even number?</p> <p>odd / even</p>