

Perimeter and Area of Triangles

A. Watch the video below (start at 4:52)

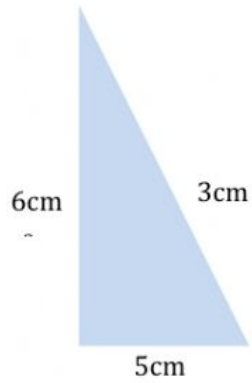


**** Please include:**
All units!
Do not put in any unnecessary spaces:
e.g. 55m not 55 m
100m² not 100 m ²

Complete the worksheet below.

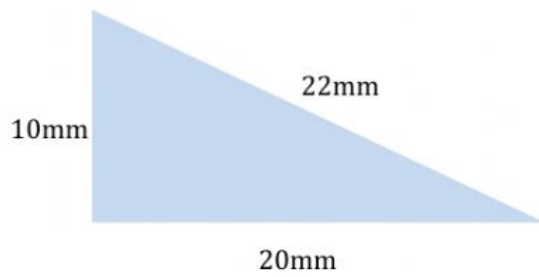


B. FIND THE PERIMETER AND AREA OF THE TRIANGLES BELOW.



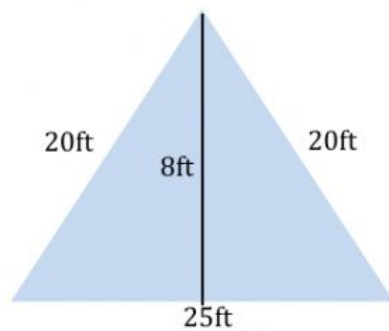
Total perimeter =

Total area =



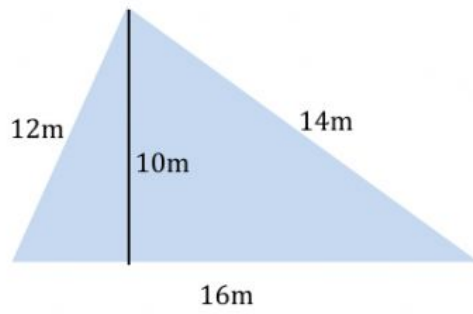
Total perimeter =

Total area =



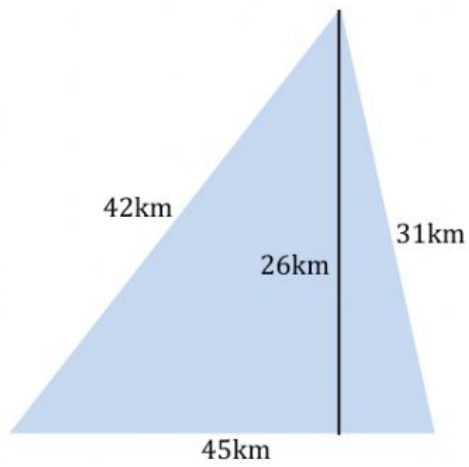
Total perimeter =

Total area =



Total perimeter =

Total area =



Total perimeter =

Total area =