

## Spinner Probability

Look at the spinners below and select if the chance of landing on a colour would be: **certain**, **likely**, **equal**, **unlikely**, or **impossible** to happen.

2. What is the chance that you would spin **green** on this spinner?




certain  
likely  
equal  
unlikely  
impossible

1. What is the chance that you would spin **orange** on this spinner?



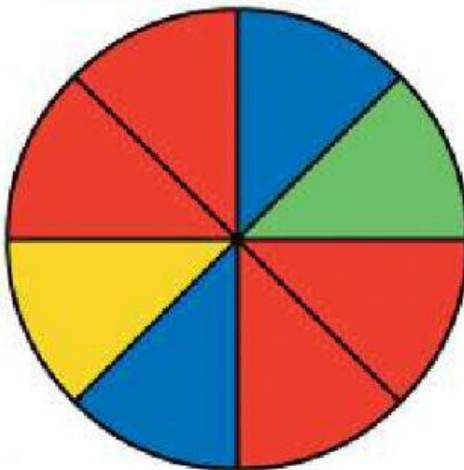
certain  
likely  
equal  
unlikely  
impossible

4. What is the chance that you would spin **red** on this spinner?



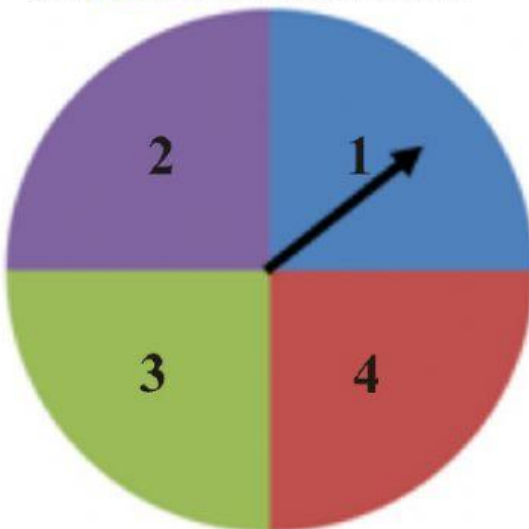
certain  
likely  
equal  
unlikely  
impossible

3. What is the chance that you would spin **blue** on this spinner?



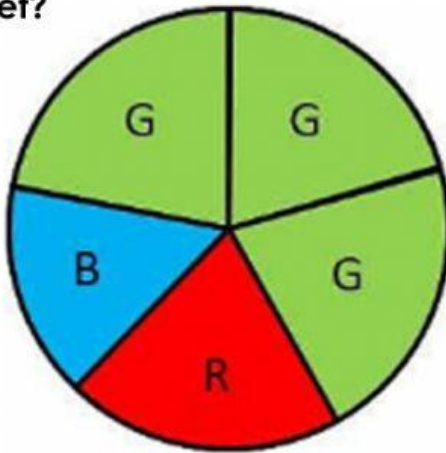
certain  
likely  
equal  
unlikely  
impossible

5. What is the chance that you would spin **purple** on this spinner?



certain  
likely  
equal  
unlikely  
impossible

6. Which colour are you more likely to get?

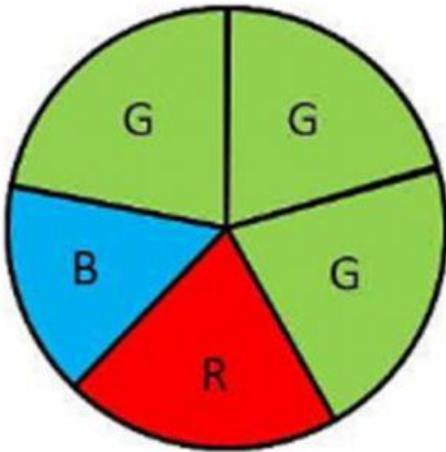


Blue

Green

Red

7. Which colour is impossible to get?



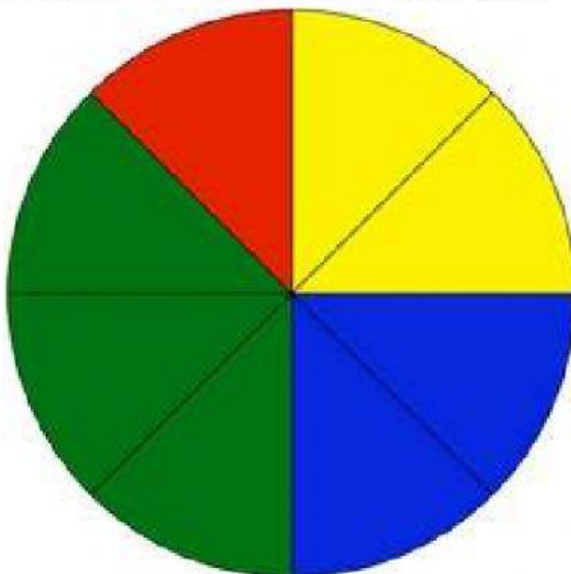
Blue

Green

Red

Purple

8. Which colour is unlikely to get?



Blue

Green

Red

Yellow