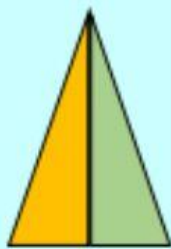



Parti uguali o parti diverse?

Osserva bene le figure e stabilisci se sono divise in parti uguali o diverse, cliccando sull'opzione che ritieni corretta.




UGUALI

DIVERSE



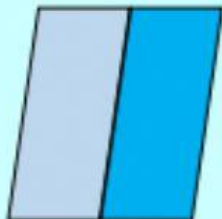
UGUALI

DIVERSE




UGUALI

DIVERSE




UGUALI

DIVERSE



UGUALI

DIVERSE




UGUALI

DIVERSE



UGUALI

DIVERSE



UGUALI

DIVERSE



UGUALI

DIVERSE