




Who am I?


I have 4 sides. 2 sides are long, and 2 sides are short. What shape am I?



I am round. I do not have any corners. What shape am I?



I have 4 sides. All 4 sides are equal. What shape am I?



I have 3 sides and 3 corners. What shape am I?

