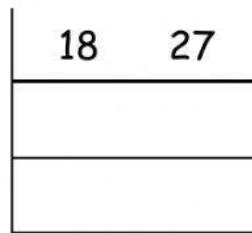


NAME: _____ DATE: _____


MATHEMATICS - COMPUTATION

1. Find the **LCM** and **GCF** for each of the following pairs of numbers.
Use the ladder method.

a. 18 and 27



b. 48 and 60



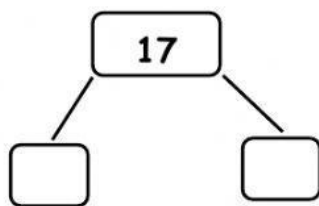
LCM= _____ [2]

LCM= _____ [3]

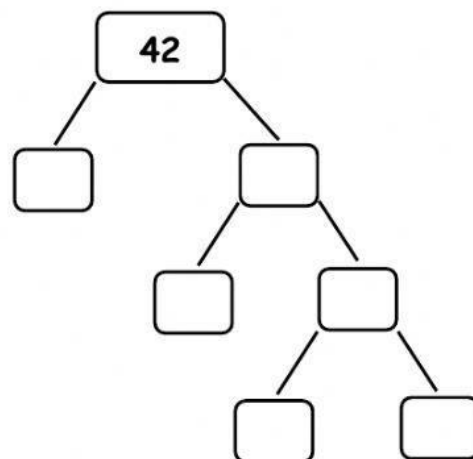
GCF= _____ [1]

GCF= _____ [1]

2. Use a factor tree to find the prime factors of each of the following:



[1]



[2]