


MATH REVISION



Multiplication and Division Grade 1

Solve these questions

1.



$$3 + 3 + 3 + 3 + 3 = \underline{\hspace{2cm}}$$

$$3 \times 5 = \underline{\hspace{2cm}}$$

$$5 \times 3 = \underline{\hspace{2cm}}$$

2. Each boy has 2 balls. How many balls altogether?



$$2 + 2 + 2 + 2 + 2 + 2 + 2 + 2 = \underline{\hspace{2cm}}$$



$$2 \times 8 = \underline{\hspace{2cm}}$$

$$8 \times 2 = \underline{\hspace{2cm}}$$

3. How many meatballs altogether?




$$2 + 2 + 2 + 2 + 2 + 2 + 2 = \underline{\hspace{2cm}}$$

$$2 \times 7 = \underline{\hspace{2cm}}$$

$$7 \times 2 = \underline{\hspace{2cm}}$$

4. Feed these 18 flies to 3 frogs equally.





$$18 - \underline{\quad} - \underline{\quad} - \underline{\quad} = 0$$

$$18 \div 3 = \underline{\quad}$$

$$18 \div 6 = \underline{\quad}$$

5. Put these 21 strawberries to 3 cakes equally.



$$21 - \underline{\quad} - \underline{\quad} - \underline{\quad} = 0$$

$$21 \div 3 = \underline{\quad}$$

$$21 \div 7 = \underline{\quad}$$