

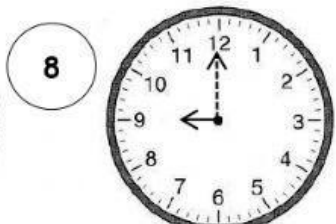



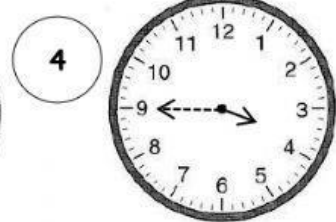
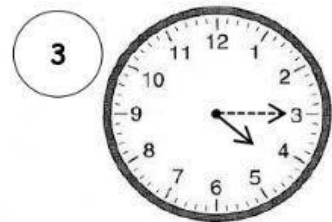

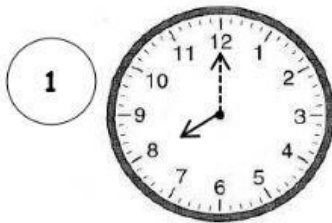


## Worksheet 1.2

Match these clocks with the time expression.



- ..... a. It's eight o'clock.
- ..... b. It's quarter past four.
- ..... c. It's ten past ten.
- ..... d. It's twenty-five to five.
- ..... e. It's nine thirty.
- ..... f. It's twenty past seven.
- ..... g. It's nine o'clock.
- ..... h. It's quarter to four.
- ..... i. It's twenty-five past five.
- ..... j. It's a quarter past one.