



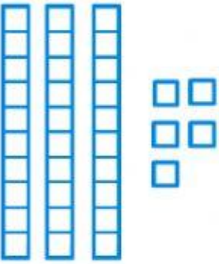
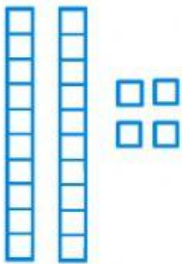
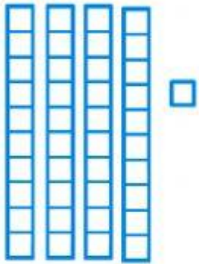
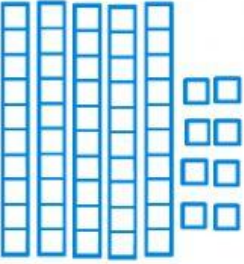
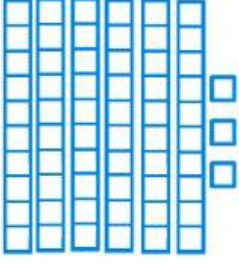

Math worksheet

Tens and ones

Objective: To count and write 10s and 1s.

Instructions: Watch the video and solve the given sums by counting in 10s and 1s.

Video link: <https://youtu.be/CJQX46x4fp8>

 <table border="1" data-bbox="403 741 568 936"><tr><td>T</td><td>O</td></tr><tr><td> </td><td> </td></tr></table>	T	O			 <table border="1" data-bbox="855 741 1019 936"><tr><td>T</td><td>O</td></tr><tr><td> </td><td> </td></tr></table>	T	O			 <table border="1" data-bbox="1305 741 1469 936"><tr><td>T</td><td>O</td></tr><tr><td> </td><td> </td></tr></table>	T	O		
T	O													
T	O													
T	O													
 <table border="1" data-bbox="403 1155 568 1350"><tr><td>T</td><td>O</td></tr><tr><td> </td><td> </td></tr></table>	T	O			 <table border="1" data-bbox="855 1155 1019 1350"><tr><td>T</td><td>O</td></tr><tr><td> </td><td> </td></tr></table>	T	O			 <table border="1" data-bbox="1305 1155 1469 1350"><tr><td>T</td><td>O</td></tr><tr><td> </td><td> </td></tr></table>	T	O		
T	O													
T	O													
T	O													