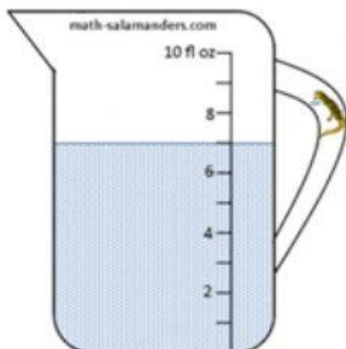


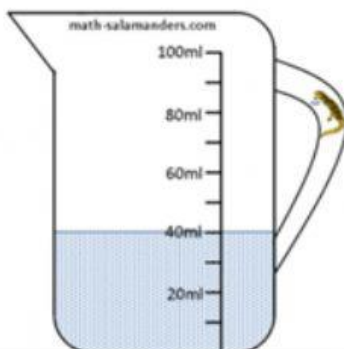
READING SCALES

Use your knowledge of the number system to read these scales which are going up in ones or tens.

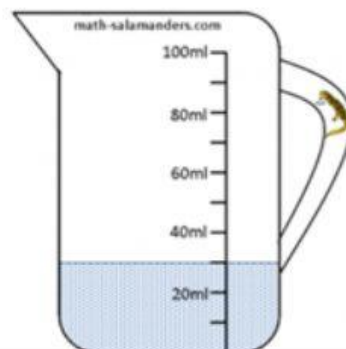
1) How many fl oz? ____



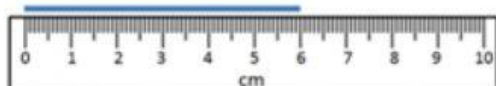
2) How many ml? ____




3) How many ml? ____



4) How long is the line? ____ cm



5) How long is the line? ____ cm



6) How long is the line? ____ mm



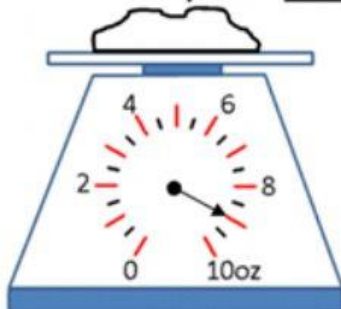
7) How long is the line? ____ mm



8) How many g? ____



9) How many oz? ____



10) How many g? ____

