







## Groups of four up to 10

Count the shapes and write the number.



I saw the following animals in the zoo. How many legs did I see?  
Write a sum for each.







Write a how many groups of 4 are there. Then write a number sentence for the groups.

2 groups of 4

$$4+4=8$$



Write a number sentence for the following:




Teacher: \_\_\_\_\_  
Sign: \_\_\_\_\_  
Date: \_\_\_\_\_




Write how many groups of feet. Fill in numbers for the number sentence.



$$\square + \square = \square$$



$$\square + \square = \square$$



$$\square + \square = \square$$

