

PRINCE ARIS CHRISTIAN SCHOOL, INC.,
4TH QUARTER UNIT TEST IN MATHEMATICS
KINDERGARTEN

I. A. Write the number that comes BEFORE.

_____ 4 _____ 11 _____ 13
_____ 8 _____ 17 _____ 9

B. Write the number that comes BETWEEN.

3 _____ 5 10 _____ 12
6 _____ 8 18 _____ 20

C. Write the number that comes AFTER.

15 _____ 9 _____ 12 _____
19 _____ 6 _____ 14 _____

II. Drag & Drop: Count the cars. Put = or \neq on the blank.

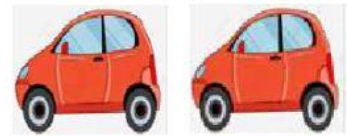


$=$	\neq
-----	--------



=

≠



=

≠

III. Write how many popsicles in all.



3

+ 1



4



+ 2




4




+ 4


IV. Write the numbers that shows how many are left.



$$6 - 1 = \underline{\quad}$$



$$4 - 2 = \underline{\quad}$$



$$7 - 3 = \underline{\quad}$$

V. Connect to match the number word to its numeral.

one	3
two	5
three	1
four	6
five	2
six	10
seven	4
eight	9
nine	8
ten	7