






5. Fizesd ki az alábbi összeget **50 Ft-osokkal!** Végezd el a bennfoglalásokat és a szorzásokat is!

9

250 Ft

400 Ft

450 Ft



$$250 : 50 = \square$$

$$\square : 5 = \square$$

$$\square \cdot 50 = 250$$

$$400 : 50 = \square$$

$$\square : 5 = \square$$

$$\square \cdot 50 = 400$$

$$450 : 50 = \square$$

$$\square : 5 = \square$$

$$\square \cdot 50 = 450$$