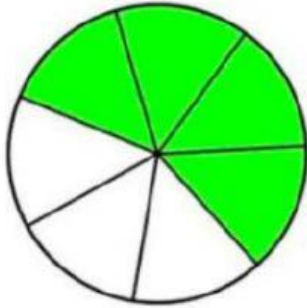


## Revision 10

What fraction is shaded?



2. What is  $12.7 - 4.8$ ?

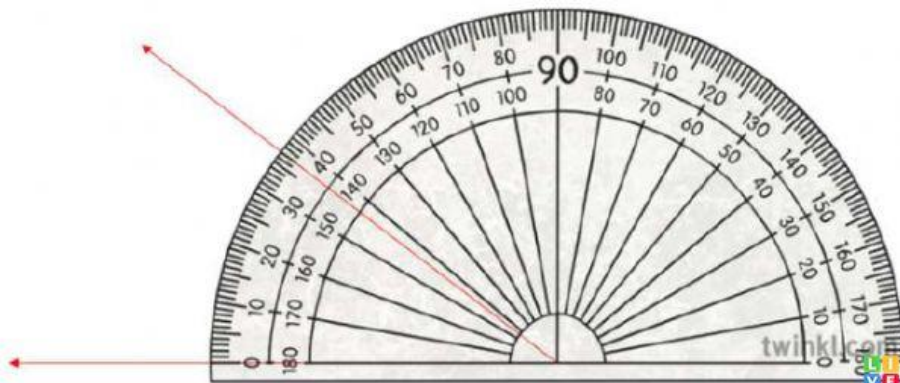
3. What is 20,000 more than 143,000?

4. What type of fraction is this?

$$\frac{7}{3}$$

5. What is  $17 \times 23$ ?

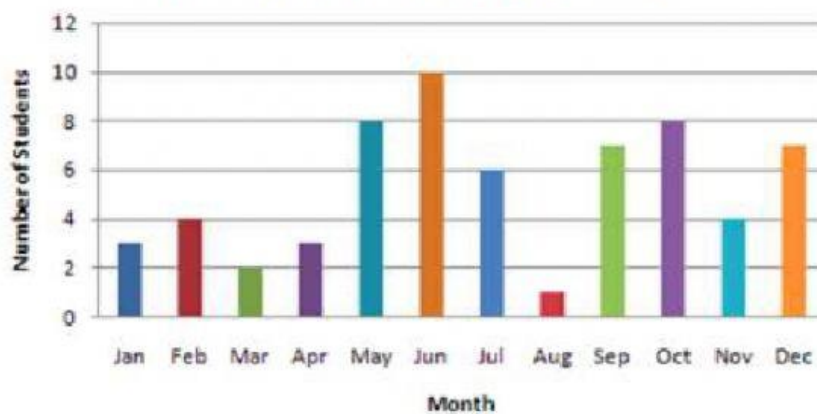
6. What angle is being shown here?



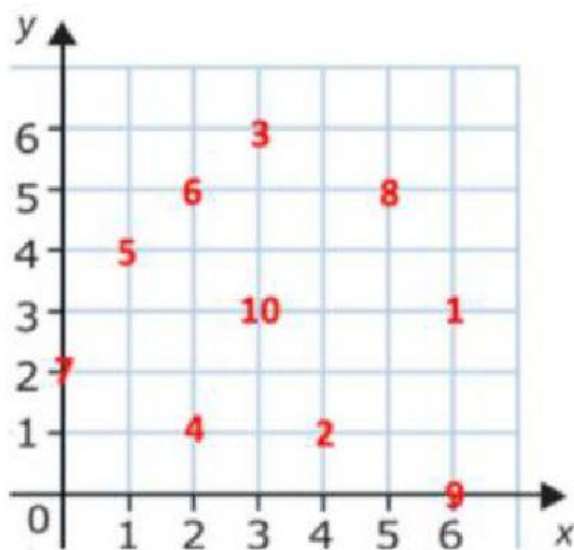
7. How many students had a birthday in September?

Layout

### ***Birthday of Students by Month***



8. What number is at the coordinates (3,6)



9. What is the value of a?

$$17 + a = 31$$

10. Simplify this fraction to its lowest form

$$\frac{8}{20}$$