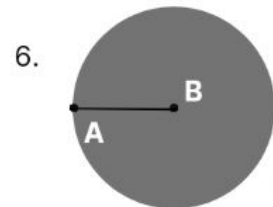
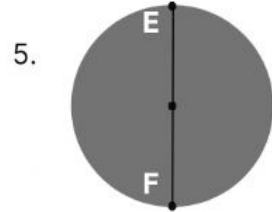
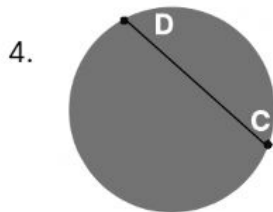
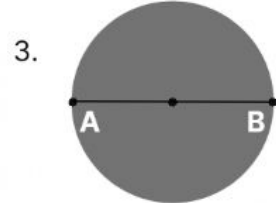
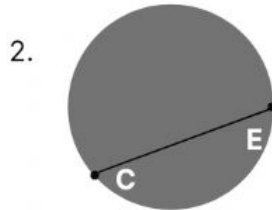
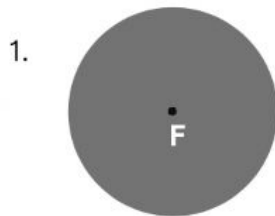


Name: _____

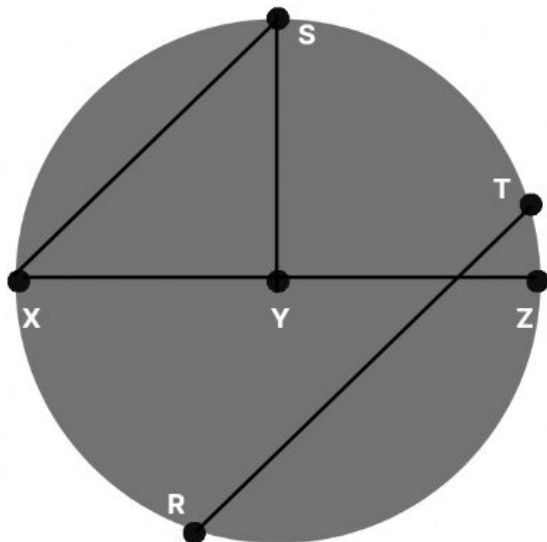
Date: _____

Parts of a Circle

Name the part of each circle given



Using the circle below, choose the right name for each question asked



7. The diameter is

8. The radii are

9. _____ is a chord

10. Line RT and Line XZ are

11. Line SY and Line XZ are

12. Line XS and Line RT are

13. Triangle XYS is a

14. Line YZ is another chord of the circle

15. Line RT has an angle of 180°