

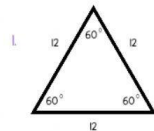
Name: _____

Date: _____

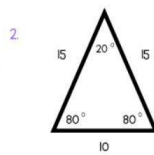
Classify Triangles

Watch this video and then answer the questions below

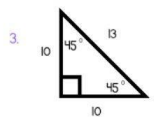
Match the triangles below to the right box that describes it.



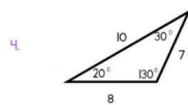
Isosceles and
Acute



Scalene and
Obtuse



Isosceles and
Right



Equilateral and
Acute

Drag the triangles below to the right box that describes it.

Sides/ Angles	Equilateral	Isosceles	Scalene
Acute			
Right Angled			
Obtuse			

