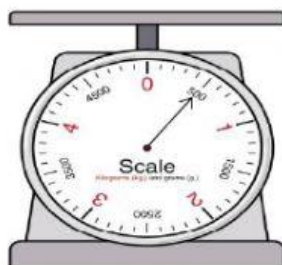


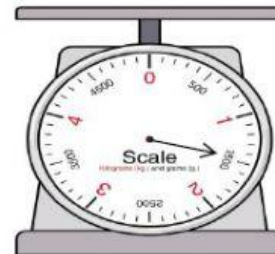
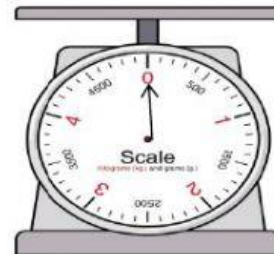
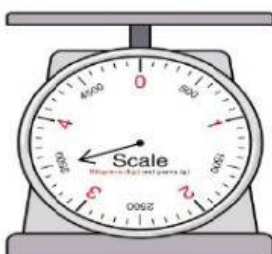
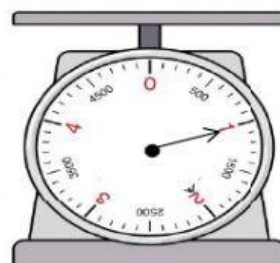

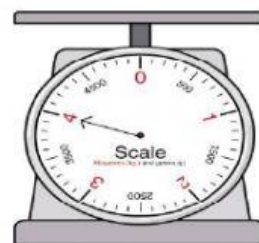
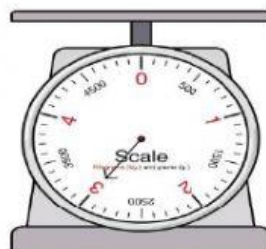


Name -			
Phase 1- Foundation Numeracy			
Class Worksheet -15			
Stage-	Progressing	Grade-	2
Conceptual Area -	Measurement	Topic-	Comparing and measuring mass





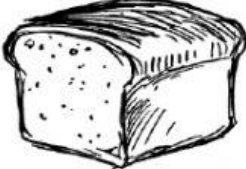




A. Write the weight shown on each scale. One digit numbers are in KG and 3 digit numbers are in grams



500 grams



B. Does it weigh in Kg or g? Circle the correct answer.

 <div> <div>Kg</div> <div>Gm</div> </div>	 <div> <div>Kg</div> <div>Gm</div> </div>	 <div> <div>Kg</div> <div>Gm</div> </div>
 <div> <div>Kg</div> <div>Gm</div> </div>	 <div> <div>Kg</div> <div>Gm</div> </div>	 <div> <div>Kg</div> <div>Gm</div> </div>
 <div> <div>Kg</div> <div>Gm</div> </div>	 <div> <div>Kg</div> <div>Gm</div> </div>	 <div> <div>Kg</div> <div>Gm</div> </div>