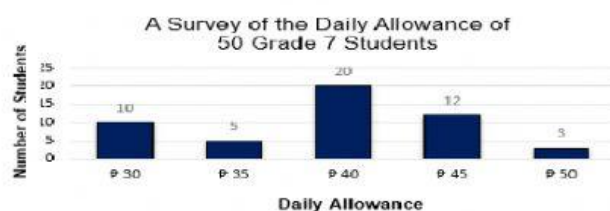


INTRODUCTION TO STATISTICS

Name: _____ Score: _____

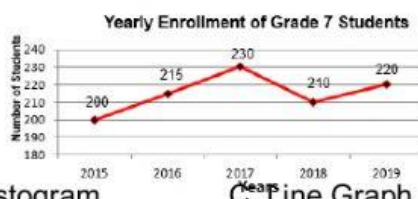
Direction: Read each item carefully and write the letter of the correct answer.

1. What is the pictorial representation of a statistical data?
A. Diagram B. Graph C. Table D. Textual
2. What graph is used to show the relationship of part of a whole?
A. Bar graph B. Histogram C. Line Graph D. Pie chart
3. What graph is illustrated below?



- A. Bar graph B. Histogram C. Line Graph D. Pie chart

4. What kind of graph is illustrated below?

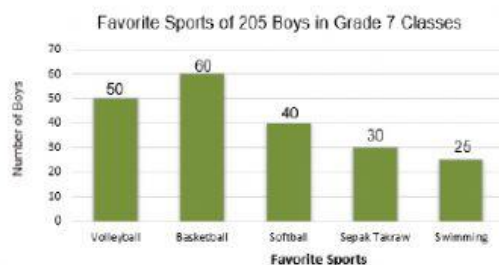


- A. Bar graph B. Histogram C. Line Graph D. Pie chart

5. Which of the graph is used to present the data that indicates trend over a period of time?

- A. Bar graph B. Histogram C. Line Graph D. Pie chart

For questions 6 -10, refer to the illustration below.



6.What two quantities are compared in the graph on the Grade 7 classes.

- A. Number of boys and hobbies
- B. Number of boys and favorite sports.
- C. Number of boys and favorite talents.
- D. Number of boys and favorite game shows

7.How many boys are interested in Softball?

- A. 20
- B. 30
- C. 40
- D. 50

8.Which sport is the most favored?

- A. Basketball
- B. Sepak Takraw
- C. Softball
- D. Volleyball

9.Which sport ranks second in interest?

- A. Basketball
- B. Sepak Takraw
- C. Softball
- D. Volleyball

10.Which sport is the least favored?

- A.Sepak takraw
- B.Softball
- C. Swimming
- D. Volleyball