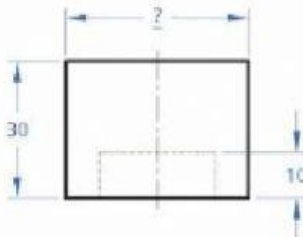

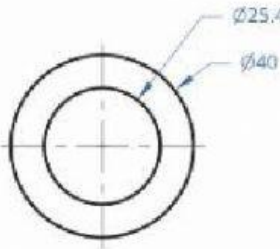






Look at the engineering drawing template and answer the questions below.

<div style="display: flex; justify-content: space-between; padding: 5px;"> 2 1 </div> <div style="display: flex; justify-content: space-around; align-items: center; padding: 10px;"> <div style="text-align: center;">  </div> <div style="text-align: center;">  </div> </div> <div style="display: flex; justify-content: space-around; align-items: center; padding: 10px;"> <div style="text-align: center;">  </div> <div style="text-align: center;">  </div> </div>	<div style="display: flex; justify-content: space-between; padding: 5px;"> 2 1 </div> <div style="display: flex; justify-content: space-between; padding: 5px;"> B B </div> <div style="display: flex; justify-content: space-between; padding: 5px;"> A A </div>																																				
<table border="1" style="width: 100%; border-collapse: collapse;"> <tr> <td style="width: 15%;"></td> <td style="width: 20%;">Name</td> <td style="width: 20%;">Date</td> <td colspan="2" style="width: 45%;">Title</td> </tr> <tr> <td>DRAWN</td> <td>Amal</td> <td>07/02/2019</td> <td colspan="2" rowspan="3" style="text-align: center; vertical-align: middle;">Cylinder</td> </tr> <tr> <td>CHECKED</td> <td>Amal</td> <td>07/02/2019</td> </tr> <tr> <td>APPROVED</td> <td></td> <td></td> </tr> <tr> <td colspan="3" style="text-align: center;">THIRD ANGLE PROJECTION</td> <td style="width: 15%;">SHEET</td> <td style="width: 15%;">DRAWING NO.</td> </tr> <tr> <td colspan="3" style="text-align: center;">  </td> <td style="text-align: center;">A4</td> <td style="text-align: center;">4</td> </tr> <tr> <td colspan="3"></td> <td style="text-align: center;">SCALE</td> <td style="text-align: center;">1:1</td> </tr> <tr> <td colspan="3"></td> <td style="text-align: center;">SHEET</td> <td style="text-align: center;">1 of 1</td> </tr> </table>			Name	Date	Title		DRAWN	Amal	07/02/2019	Cylinder		CHECKED	Amal	07/02/2019	APPROVED			THIRD ANGLE PROJECTION			SHEET	DRAWING NO.				A4	4				SCALE	1:1				SHEET	1 of 1
	Name	Date	Title																																		
DRAWN	Amal	07/02/2019	Cylinder																																		
CHECKED	Amal	07/02/2019																																			
APPROVED																																					
THIRD ANGLE PROJECTION			SHEET	DRAWING NO.																																	
			A4	4																																	
			SCALE	1:1																																	
			SHEET	1 of 1																																	

1- What is the name of the document?

2- What is the size of the paper used?

3- What is the scale used to draw the part?

- 4- Do the projections follow the first angle projection or the third angle projection?
- 5- What is the DWG NO. mentioned on this engineering drawing template?