

CASA DEL LIBRO - CHOSEN EDUCATION

GRADE 1 - MATHEMATICS

4TH QUARTER - WEEK 6, 7, and 8


MEASUREMENT

NAME: _____

SCORE: _____


I. DIRECTIONS: Write the estimated measurement of the following. (6 points)

1. How many **cubes** long is the crocodile?



_____ cubes

2. How many **cubes** tall is the hippo?



_____ cubes

3. How many **lolly sticks** long is the desk?



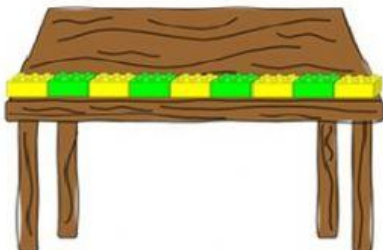
_____ lolly sticks

4. How many **lolly sticks** tall is the bucket?




_____ lolly sticks

5. How many **blocks** long is the desk?



_____ blocks

6. How many **blocks** tall is the teddy?




_____ blocks

- II. **DIRECTIONS:** Choose seven (7) small objects around your house that you like to measure. Write the name of the objects you chose on the first column then complete the table. (21 points)

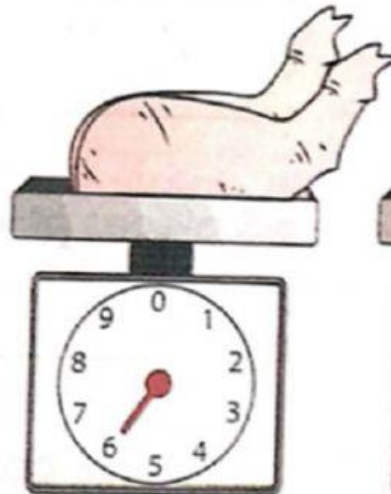
Comparison of length using non standard tool and standard tool:

NAME OF OBJECT	NON STANDARD TOOL: <u>PAPER CLIP</u>	STANDARD TOOL: <u>RULER (in inches)</u>


III. DIRECTIONS: Give the weight shown in the weighing scale. (6 points)




___ kilograms




___ kilograms




___ kilograms



___ kilograms




___ kilograms



___ kilograms

IV. DIRECTIONS: Check the heavier object and cross out the lighter object. (6 points)

1)



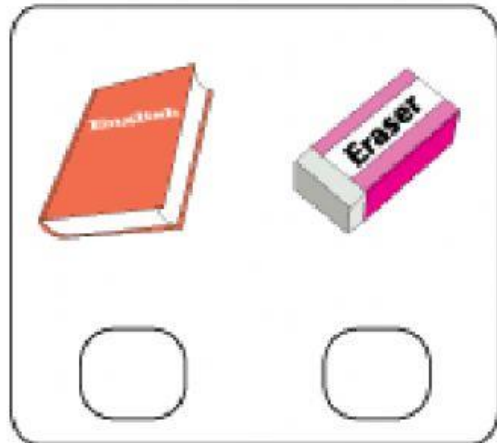
2)




3)



4)



5)



6)

