


Vertical Addition

Add all the flowers. How many are there in all?

3



+ 4




2



+ 2




5



+ 4



6



+ 1

