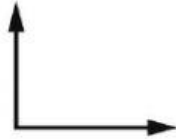


Unit 15 & 16 Mock Test

1. Draw one of the symbols $<$ $=$ $>$ to show whether each angle is greater than, less than or equal to a right angle.



$<$ $=$ $>$



$<$ $=$ $>$



$<$ $=$ $>$

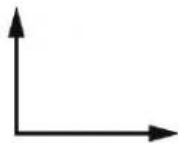


$<$ $=$ $>$

2. Choose the correct word to show if the angle is smaller, larger or right angle.



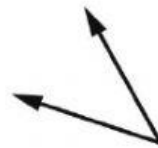
Smaller larger right



smaller larger right

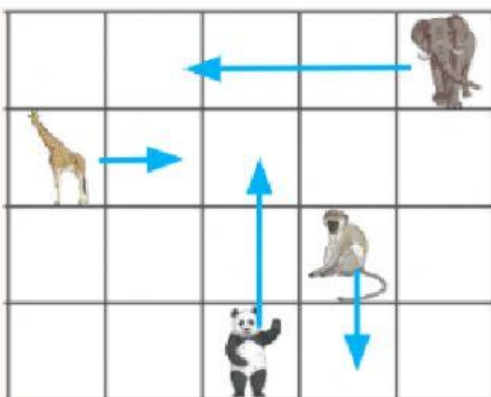


smaller larger right



smaller larger right

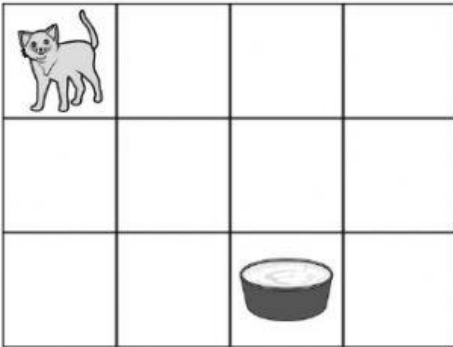
3. Complete the sentences. Use the words: north, south, east, and west.



1. The elephant has moved 3 steps to the _____
2. The monkey has moved 1 step to the _____
3. The panda has moved 2 steps to the _____

4. The giraffe has moved 1 step to the _____

4. Write a route for the cat to get the milk



5. If you roll a 1 to 9 dice, you will roll a number between 10 and 13. Do you agree? Why?

6. Choose 'it will happen' or 'it will not happen' or 'it might happen'

1. What are the chances of you getting the full mark in a test?

Will happen - might happen - will not happen

2. What are the chances of you growing wings and flying around town?

Will happen - might happen - will not happen

3. What are the chances of having a fire in the school?

Will happen - might happen - will not happen

4. What are the chances that Wednesday will come after Tuesday?

Will happen - might happen - will not happen

7. What are the chances that the spinner will land on number 15?



8. You have five chances to spin the spinner. How likely is it that you will get less than 50? Explain your reason.

