

Name: _____

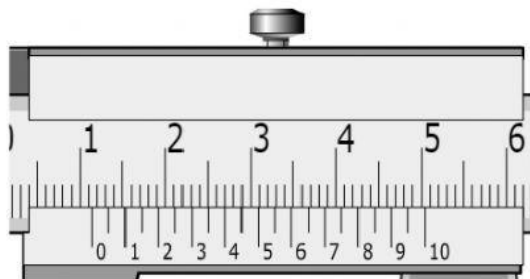
Date: _____

Program, Year & Section: _____

Score: _____

Worksheet 3 Vernier Caliper

Fill-in the blanks with the appropriate answers to come up with the correct reading as indicated in the diagram.

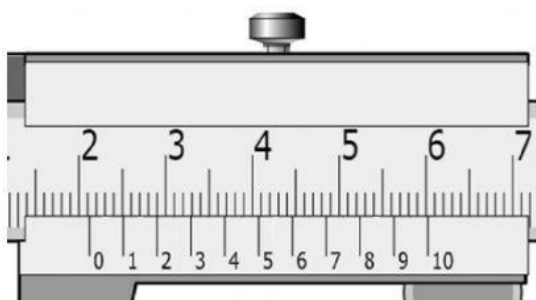


MSR = _____ mm

VSR = _____

LC = _____ mm

RDG = _____ mm

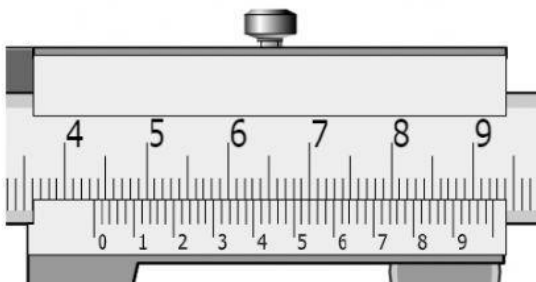


MSR = _____ mm

VSR = _____

LC = _____ mm

RDG = _____ mm

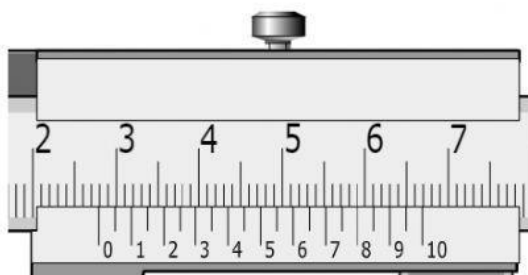


MSR = _____ mm

VSR = _____

LC = _____ mm

RDG = _____ mm

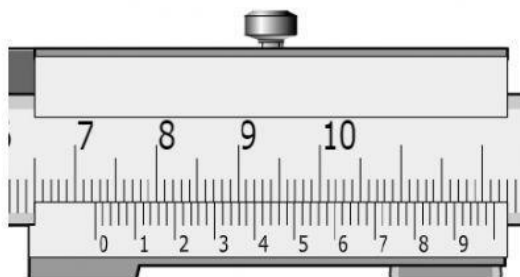


MSR = _____ mm

VSR = _____

LC = _____ mm

RDG = _____ mm



MSR = _____ mm

VSR = _____

LC = _____ mm

RDG = _____ mm