


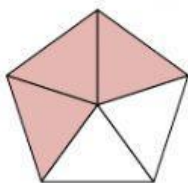
NOM _____

DATA _____

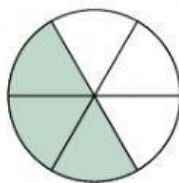
FRACCIONS

Instruccions:**Escriu les fraccions que representen les seccions ombrejades per a cada forma:**

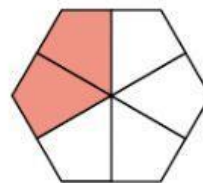
| |
|---------------|
| $\frac{4}{5}$ |
|---------------|



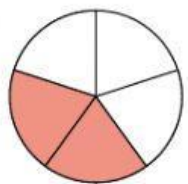
| |
|-------|
| _____ |
|-------|



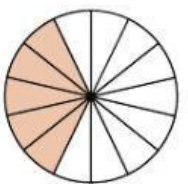
| |
|-------|
| _____ |
|-------|



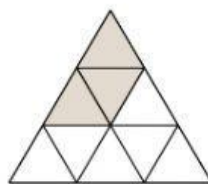
| |
|-------|
| _____ |
|-------|



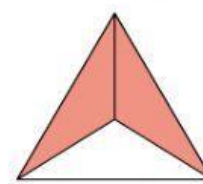
| |
|-------|
| _____ |
|-------|



| |
|-------|
| _____ |
|-------|



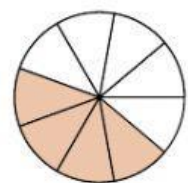
| |
|-------|
| _____ |
|-------|



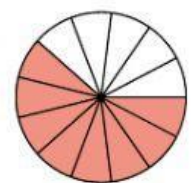
| |
|-------|
| _____ |
|-------|



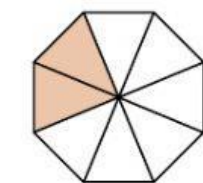
| |
|-------|
| _____ |
|-------|



| |
|-------|
| _____ |
|-------|



| |
|-------|
| _____ |
|-------|



| |
|-------|
| _____ |
|-------|