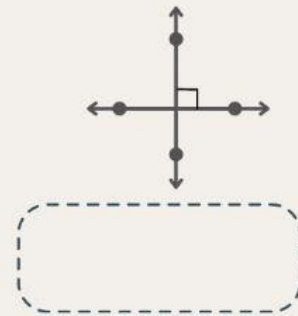
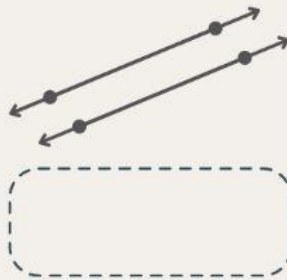
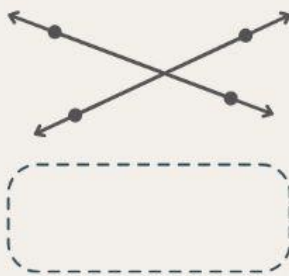
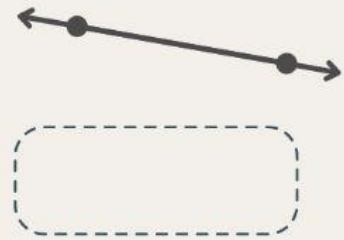
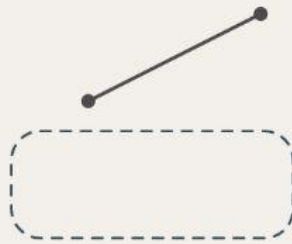


Points, Lines, and Line Segments

Select the right option for each figure.



Match the symbols to their corresponding definitions

\overleftrightarrow{CD}

line CD or line DC

$\overline{CD} \parallel \overline{AB}$

line segment CD or line segment DC

\overline{CD}

line CD is perpendicular to line AB

$\overleftrightarrow{CD} \perp \overleftrightarrow{AB}$

line CD is parallel to line AB