



NAME THAT ANGLE!

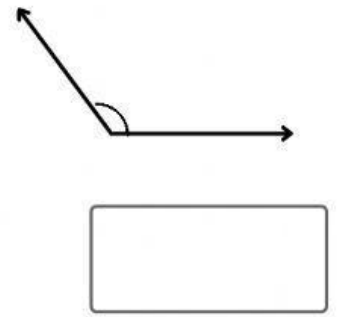

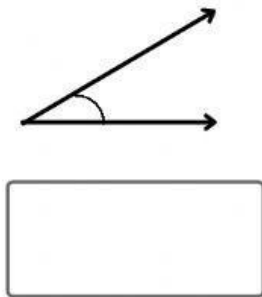
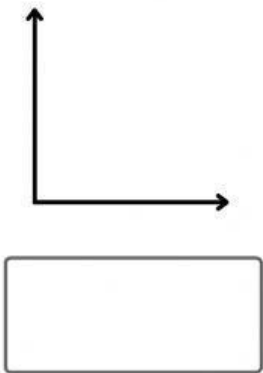
Identify the angles below. Drag the right option to the corresponding angle.

obtuse angle

acute angle

right angle

straight line



DEFINITION OF ANGLES

Match the angle to the right definition

acute angle

right angle

straight line

obtuse angle

90 degrees

Less than 90 degrees

More than 90 degrees but less than 180 degrees

180 degrees