






















Name:

Class:

PRACTICE

Compass Directions

		bakery 			mosque 	
church 		park 		hospital 		
	taxi rank 		postbox 			cafe 
fire station 		toy shop 		airport 		
	school 		vet 		pool 	
theme park 		police station 				beach 
bus stop 		dentist 			supermarket 	

Compass directions: the town

1. From the start, go north 4 squares. Where are you now?
2. Go east 3 squares. Where are you now?
3. Go south 3 squares. Where are you now?
4. Go west 6 squares. Where are you now?
5. Go east 2 squares. Where are you now?
6. Start at the school. How do you get to the taxi rank?
7. Give directions from the dentist to the toy shop.